

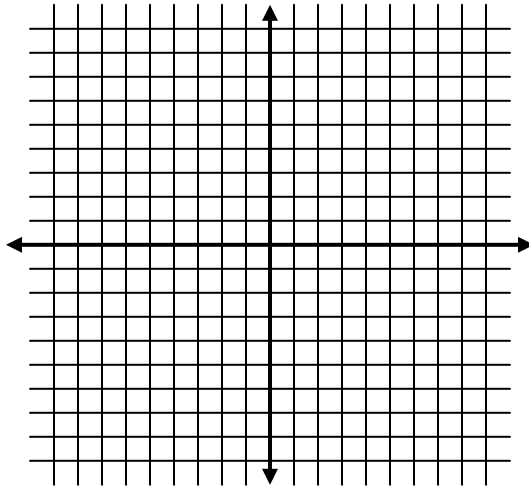
**Systems of Equations** – Solve by graphing

Name \_\_\_\_\_

Solve the following systems of equations by graphing. Write your answer as an ordered pair  $(x, y)$ .

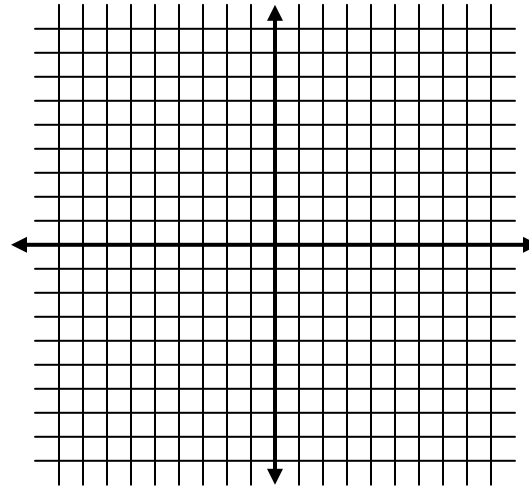
1)  $3x - y = 6$

$2x + 4y = 18$



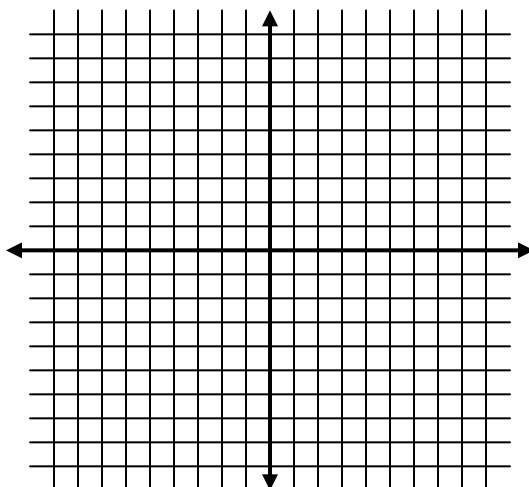
2)  $2x + 4 = y - 2$

$4x - y = -6$



3)  $4x + 3y = 2$

$y = 3x - 5$



4)  $2x + 5y = 30$

$-2x + 3y = 2$

