

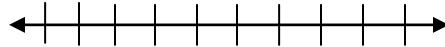
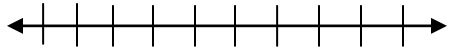
Solving Inequalities

Name _____

Solve the following inequalities. Be sure to graph your solution.

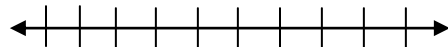
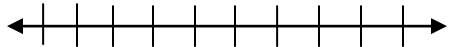
1) $3x + 2 > 11$

2) $4 + 2x \leq 10$



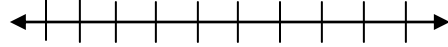
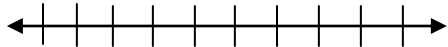
3) $5 < 3x - 10$

4) $6y + 11 \geq 5$



5) $5x + 4 < -16$

6) $2y - 14 > 4$



7) $11x - 12 \geq 21$

8) $5 > 17 + 3z$

